

**SUMMER VACATION HOLIDAYS HOMEWORK 2019**  
**SUBJECT-PHYSICS**  
**CLASS-XII**

**SHORT ANSWER QUESTIONS (2 MARKS)**

1. An oil drop of mass  $m$  carrying charge  $-Q$  is to be held stationary in the gravitational field of the earth. What is the magnitude and direction of the electrostatic field required for his purpose ? **Ans.**  $E = mg/Q$ , downward
2. Draw  $E$  and  $V$  versus  $r$  on the same graph for a point charge.
3. Find position around dipole at which electric potential due to dipole is zero but has non zero electric field intensity.

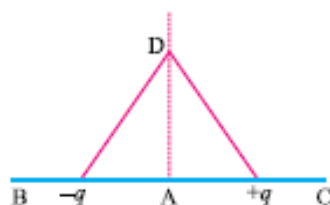
**Ans.** Equatorial position,  $V = 0$ ,  $E = \frac{1}{4\pi\epsilon_0} \frac{-\vec{p}}{r^3}$

4. Derive an expression for the work done in rotating an electric dipole from its equilibrium position to an angle  $\theta$  with the uniform electrostatic field.
5. A electrostatic field line can not be discontinuous. Why ?
6. A thin long conductor has linear charge density of  $20 \mu\text{C/m}$ . Calculate the electric field intensity at a point 5 cm from it. Draw a graph to show variation of electric field intensity with distance from the conductor.

**Ans.**  $72 \times 10^5 \text{ N/C}$

7. What is the ratio of electric field intensity at a point on the equatorial line to the field at a point on axial line when the points are at the same distance from the centre of the dipole ? **Ans.** 1 : 2
8. Show that the electric field intensity at a point can be given as negative of potential gradient.
9. A charged metallic sphere A having charge  $q_A$  is brought in contact with an uncharged metallic sphere of same radius and then separated by a distance  $d$ . What is the electrostatic force between them. **Ans.**  $\frac{1}{16\pi\epsilon_0} \frac{q_A^2}{d^2}$

10. An electron and a proton travel through equal distances in the same uniform electric field  $E$ . Compare their time of travel. (Neglect gravity)
11. Two point charges  $-q$  and  $+q$  are placed  $2l$  metre apart, as shown in Fig. Give the direction of electric field at points A, B, C and D, A is mid point between charges  $-q$  and  $+q$ .



12. The electric potential  $V$  at any point in space is given  $V = 20x^3$  volt, where  $x$  is in meter. Calculate the electric intensity at point  $P(1, 0, 2)$ .

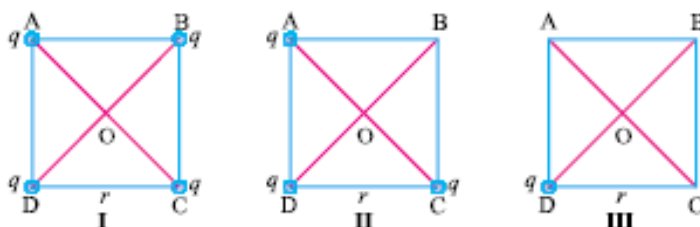
Ans.  $60 \text{ NC}^{-1}$

13. Justify why two equipotential surfaces cannot intersect.  
 14. Find equivalent capacitance between A and B in the combination given below : each capacitor is of  $2 \mu\text{F}$ .

Ans.  $6/7 \mu\text{F}$



15. What is the electric field at  $O$  in Figures (i), (ii) and (iii), ABCD is a square of side  $r$ .



Ans. (i) Zero, (ii)  $\frac{q}{4\pi\epsilon_0 r^2}$  (iii)  $\frac{2q}{4\pi\epsilon_0 r^2}$

16. What should be the charge on a sphere of radius 4 cm, so that when it is brought in contact with another sphere of radius 2 cm carrying charge of  $10 \mu\text{C}$ , there is no transfer of charge from one sphere to other ?

Ans.  $V_a = V_b, Q = 20 \mu\text{C}$ .

17. For an isolated parallel plate capacitor of capacitance  $C$  and potential difference  $V$ , what will be change in (i) charge on the plates (ii) potential difference across the plates (iii) electric field between the plates (iv) energy stored in the capacitor, when the distance between the plates is increased ?

Ans. (i) No change (ii) increases (iii) No change (iv) increases.

18. Does the maximum charge given to a metallic sphere of radius  $R$  depend on whether it is hollow or solid? Give reason for your answer.

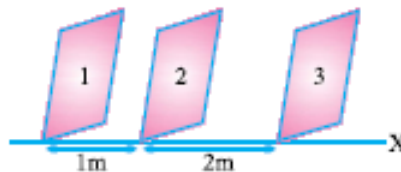
Ans. No charge resides on the surface of conductor.

19. Two charges  $Q_1$  and  $Q_2$  are separated by distance  $r$ . Under what conditions will the electric field be zero on the line joining them (i) between the charges (ii) outside the charge?

Ans. (i) Charge are alike (ii) Unlike charges of unequal magnitude.

20. Obtain an expression for the electric field due to electric dipole at any point on the equatorial line.

21. The electric field component in the figure are  $\vec{E}_x = 2x \hat{i}$ ,  $\vec{E}_y = E_y \hat{j}$ ,  $E_z = 0$ . Calculate the electric flux through, (1, 2, 3) the square surfaces of side 5 m.



22. Calculate the work required to separate two charges  $5\mu\text{C}$  and  $-2\mu\text{C}$  placed at  $(-3\text{ cm}, 0, 0)$  and  $(+3\text{ cm}, 0, 0)$  infinitely away from each other.

23. What is electric field between the plates with the separation of 2 cm and (i) with air (ii) dielectric medium of dielectric constant  $K$ . Electric potential of each plate is marked in the following figure.

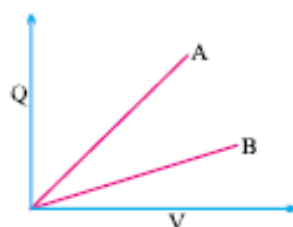
\_\_\_\_\_ 150 V

- (i) \_\_\_\_\_ - 50 V      Ans.  $E_0 = 10^4 \text{ NC}^{-1}$ ,  $E = \frac{10^4}{k} \text{ NC}^{-1}$

24. A RAM (Random access Memory) chip a storage capacitor has a capacity of 55pF. If the capacitor is charged to 5.3V, how many excess electrons are on its negative plate?      Ans.  $1.8 \times 10^9$

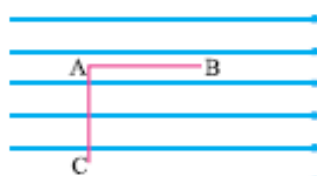
25. The figure shows the  $Q$  (charge) versus  $V$  (potential) graph for a combination of two capacitors. identify the graph representing the parallel combination.





Ans. A represents parallel combination

26. Calculate the work done in taking a charge of  $1 \mu\text{C}$  in a uniform electric field of  $10 \text{ N/C}$  from B to C given  $AB = 5 \text{ cm}$  along the field and  $AC = 10 \text{ cm}$  perpendicular to electric field.



Ans.  $W_{AB} = W_{BC} = 50 \times 10^{-8} \text{ J}$ .  $W_{AC} = 0 \text{ J}$

27. Two charges  $-q$  and  $+q$  are located at points A  $(0, 0, -a)$  and B  $(0, 0, +a)$  respectively. How much work is done in moving a test charge from point P  $(7, 0, 0)$  to Q  $(-3, 0, 0)$ ? (zero)
28. The potential at a point A is  $-500 \text{ V}$  and that at another point B is  $+500 \text{ V}$ . What is the work done by external agent to take 2 units (S.I.) of negative charge from B to A.
29. How does the Potential energy of (i) mutual interaction (ii) net electrostatic P.E. of two charges change when they are placed in an external electric field.
30. With the help of an example, show that Farad is a very large unit of capacitance.
31. What is meant by dielectric polarisation? Why does the electric field inside a dielectric decrease when it is placed in an external field?
32. In charging a capacitor of capacitance  $C$  by a source of emf  $V$ , energy supplied by the source is  $QV$  and the energy stored in the capacitor is  $\frac{1}{2}QV$ . Justify the difference.
33. An electric dipole of dipole moment  $p$ , is held perpendicular to an electric field; (i)  $p = E_0 i$  (ii)  $E = E_0 \times i$ . If the dipole is released does it have (a) only rotational motion (b) only translatory motion (c) both translatory and rotatory motion?
34. The net charge of a system is zero. Will the electric field intensity due to this system also be zero.
35. A point charge  $Q$  is kept at the intersection of (i) face diagonals (ii) diagonals of a cube of side  $a$ . What is the electric flux linked with the cube in (i) & (ii)?

## LONG ANSWER QUESTIONS (5 MARKS)

1. Two charged capacitors are connected by a conducting wire. Calculate common potential of capacitors (ii) ratio of their charges at common potential. Show that energy is lost in this process.
2. Derive an expression for the strength of electric field intensity at a point on the axis of a uniformly charged circular coil of radius  $R$  carrying charge  $Q$ .
3. Derive an expression for potential at any point distant  $r$  from the centre  $O$  of dipole making an angle  $\theta$  with the dipole.
4. Suppose that three points are set at equal distance  $r = 90$  cm from the centre of a dipole, point  $A$  and  $B$  are on either side of the dipole on the axis ( $A$  closer to +ve charge and  $B$  closer to  $-$ ve charge) point  $C$  which is on the perpendicular bisector through the line joining the charges. What would be the electric potential due to the dipole of dipole moment  $3.6 \times 10^{-19}$  Cm at points  $A$ ,  $B$  and  $C$  ?
5. Derive an expression for capacitance of parallel plate capacitor with dielectric slab of thickness  $t(t < d)$  between the plates separated by distance  $d$ . How would the following (i) energy (ii) charge, (iii) potential be affected if dielectric slab is introduced with battery disconnected, (b) dielectric slab is introduced after the battery is connected.
6. Derive an expression for torque experienced by dipole placed in uniform electric field. Hence define electric dipole moment.
7. State Gauss's theorem. Derive an expression for the electric field due to a charged plane sheet. Find the potential difference between the plates of a parallel plate capacitor having surface density of charge  $5 \times 10^{-8}$  Cm<sup>-2</sup> with the separation between plates being 4 mm.
8. Define current density. Give its SI unit. Whether it is vector or scalar ? How does it vary when (i) potential difference across wire increases (ii) length of wire increases (iii) temperature of wire increases (iv) Area of cross-section of wire increases justify your answer.